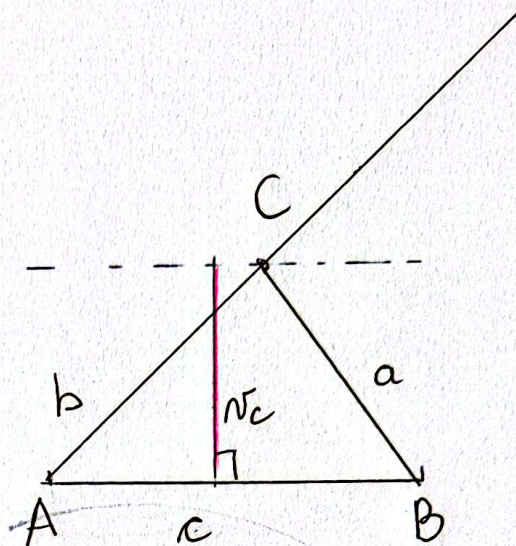
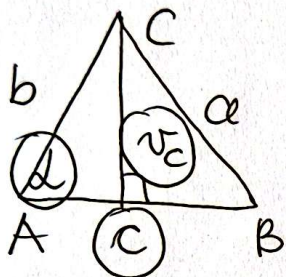
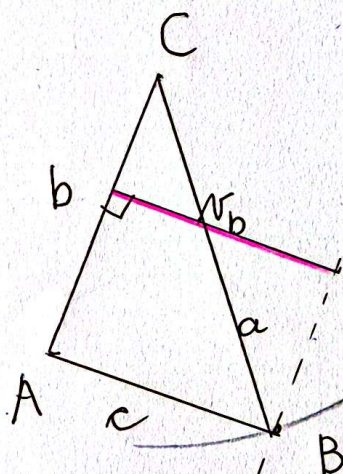
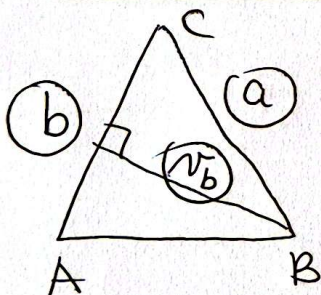


VIŠINE TRIKOTNIKA

⑤. a). $c = 5\text{cm}$
 $h_c = 3\text{cm}$
 $\alpha = 45^\circ$



b). $b = 4\text{cm}$
 $h_b = 3,2\text{cm}$
 $a = 5\text{cm}$



c). $a = 5,3\text{cm}$
 $h_a = 3\text{cm}$
 $c = 4\text{cm}$

