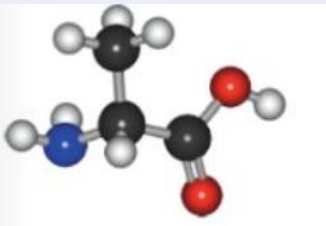
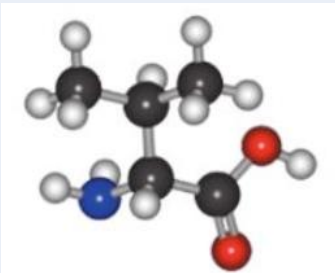
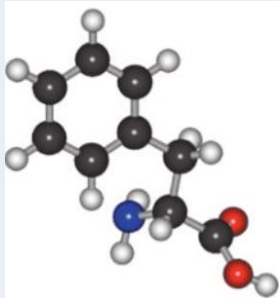


# Naloga: Nariši primere treh aminokislin in zraven tudi poenostavljen prikaz

	Alanin (A)	Valin (V)	Fenilalanin (F)
Racionalna formula aminokislina	$\begin{array}{c} \boxed{\text{CH}_3} \\   \\ \text{H}_2\text{N}-\text{C}-\text{COOH} \\   \\ \text{H} \end{array}$	$\begin{array}{c} \boxed{\begin{array}{c} \text{CH}_3 \\   \\ \text{CH}-\text{CH}_3 \end{array}} \\   \\ \text{H}_2\text{N}-\text{C}-\text{COOH} \\   \\ \text{H} \end{array}$	$\begin{array}{c} \boxed{\text{C}_6\text{H}_5} \\   \\ \text{CH}_2 \\   \\ \text{H}_2\text{N}-\text{C}-\text{COOH} \\   \\ \text{H} \end{array}$
Kroglični model			
Poenostavljen prikaz	$\text{H}_2\text{N}-\boxed{\text{A}}-\text{COOH}$	$\text{H}_2\text{N}-\boxed{\text{V}}-\text{COOH}$	$\text{H}_2\text{N}-\boxed{\text{F}}-\text{COOH}$