




1. Obkroži sliko, ki prikazuje pizo, ki je razdeljena na 4 enake dele oziroma ČETRRTINE.



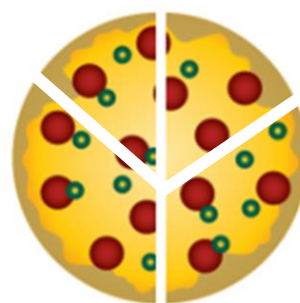
2. Ali je prikazana četrtnina ali ne?



DA NE



DA NE

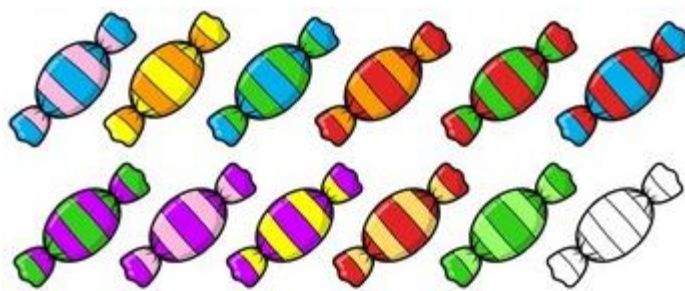


DA NE

3. Obkroži četrtnino likov in napiši račun:

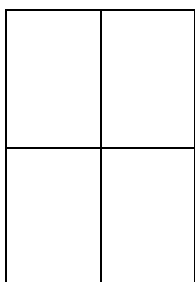


$8 : 4 = \underline{\hspace{2cm}}$

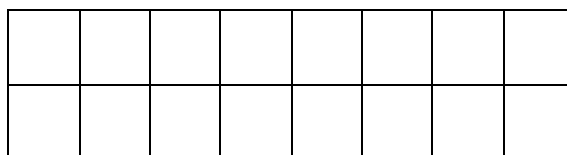


$12 : 4 = \underline{\hspace{2cm}}$

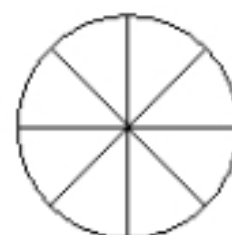
4. Pobarvaj (eno)četrtnino lika. Pomagaj si z računi deljenja.



$4 : 4 = \underline{\hspace{2cm}}$



$16 : 4 = \underline{\hspace{2cm}}$



$8 : 4 = \underline{\hspace{2cm}}$